



GHAZIABAD PUBLIC SCHOOL

EXTENDED
LEARNING
AT HOME

GRADE - 5


2024 - 2025






Dear Parent,
Children are born with natural curiosity and inquisitiveness about the world around them. It is important for us to help them keep this spark alive and to make learning fun.

Summer Vacation is just round the corner, let every moment of this vacation be a time to unite, connect and enjoy beautiful moments with your child.







To be ready for tomorrow's opportunities, do your homework today.
Learn, refine your skills and focus on your growth.

Dear Students,
Summer has arrived and brought with it your amazing and fun-filled holidays. Summer break is a well-deserved opportunity to relax and unwind by indulging in various activities. Your Holiday Homework has been specially designed for you to be creative, innovative and imaginative while completing your tasks. It will also enable you to recapitulate what was taught in the classrooms. We hope you will play, learn, research, analyze, experiment, imagine, think, value, appreciate and above all enjoy during your holidays. Wishing you happy holidays!

Instructions for the students:

- * Do your holiday homework in your respective subject notebooks.
 - * Mention date and day when you do your work.
 - * Use your creativity and imagination wherever required.
 - * Submit your holiday homework when the school re-opens.
- 



Here are some activities given to help your child become independent and confident:-

Independent Me

- * Buttoning and Unbuttoning
- * Put on your Socks and Shoes
- * Keeping belongings back in their place
- * Filling the water bottles
- * Keeping room clean and well-organized
- * Tear a Chapati and eat your Meal on your own

Alone we can do so little; together we can do so much.

(Social Skills)

- * Wish your elders with a smile
- * Go outdoors and play with your friends
- * Use magical words: Sorry, Please, Excuse Me, Thank You

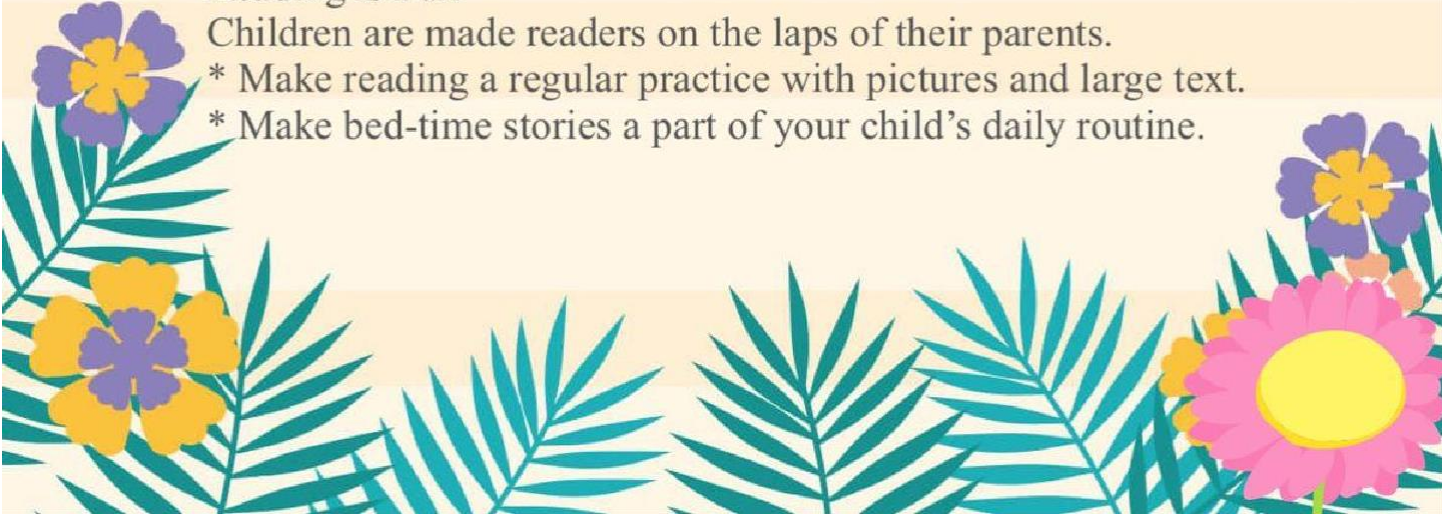
One, who maintains cleanliness, keeps away diseases.

(Personal Hygiene)

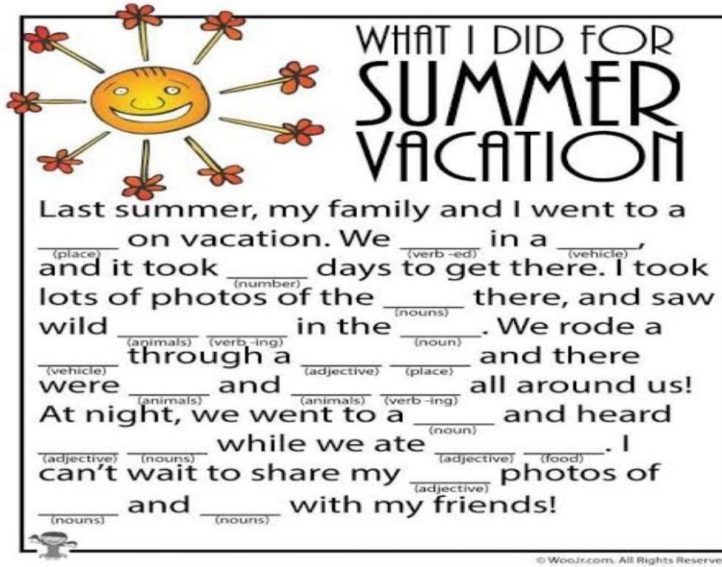
- * Brushing teeth twice a day.
- * Combing hair regularly
- * Bathing everyday
- * Washing hands before and after meals.

Reading is Fun

Children are made readers on the laps of their parents.

- * Make reading a regular practice with pictures and large text.
 - * Make bed-time stories a part of your child's daily routine.
- 

SUBJECT- ENGLISH



WHAT I DID FOR
SUMMER
VACATION

Last summer, my family and I went to a _____ on vacation. We _____ in a _____, and it took _____ days to get there. I took lots of photos of the _____ there, and saw wild _____ in the _____. We rode a _____ through a _____ and there were _____ and _____ all around us! At night, we went to a _____ and heard _____ while we ate _____. I can't wait to share my _____ photos of _____ and _____ with my friends!

© WooJr.com. All Rights Reserved.

General Instruction :- 1. Kindly get the printout of the worksheet.

Q. 2. Read the poem 'Don't Be Afraid of the Dark' given in the course book and answer the given questions.

- What is the poem about?
- What happens when the day is over?
- What does the earth do when the day is over?
- What does the poet want us to do at night?

Summers are here and for beating the heat of this scorching sun seek your mother's help and make a delicious fruit salad for your father to give him a special surprise on Father's Day (16-06-2024) with all the fruits of your choice.



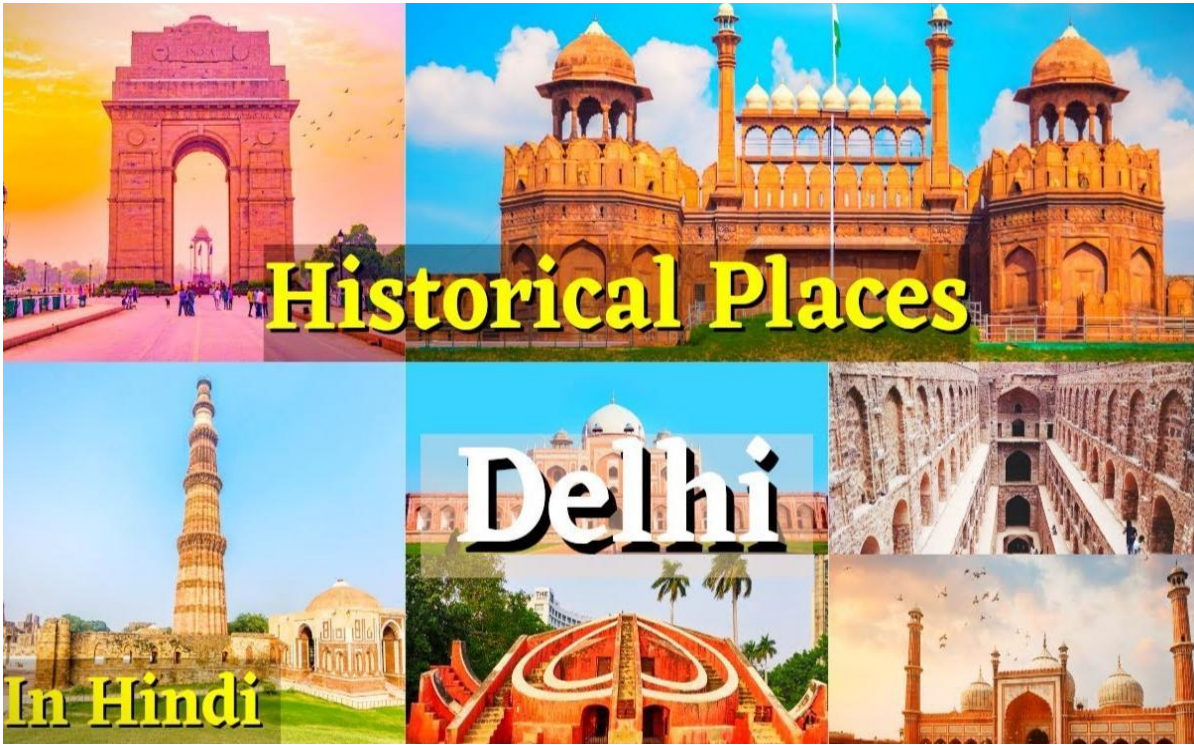
विषय- हिंदी

उद्देश्य-

- * शुद्ध उच्चारण के साथ पढ़ने का अभ्यास।
- * शब्दकोश में वृद्धि।
- * सुलेख द्वारा अक्षरों की बनावट में सुधार।

गतिविधियाँ

- * बाल शोषण को समाप्त करने के लिए आप क्या-क्या कदम उठा सकते हैं, विषय पर एक A3 रंगीन सीट पर चित्रों की सहायता से चार्ट बनाएं एवं उसके विषय पर कुछ पंक्तियाँ लिखें
- * दिल्ली में उपस्थित ऐतिहासिक इमारतों में से किसी एक का मॉडल बनाएँ।



- * लिंग या वचन से संबंधित एक प्रोजेक्ट बनाएं।
- * पठन एवं लेखन अभ्यास करें।

Subject - Science

Fun and Learn

Q1. Make a 3-D model on Seed germination.

Hint: Take reference from these given  links.

- <https://youtu.be/MTfLXSDLJ14?si=o6tBny45CQ6BnmAO>
- <https://youtu.be/4lxNPOU7Zv4?si=vFzmkhWVTwpcxH6e>

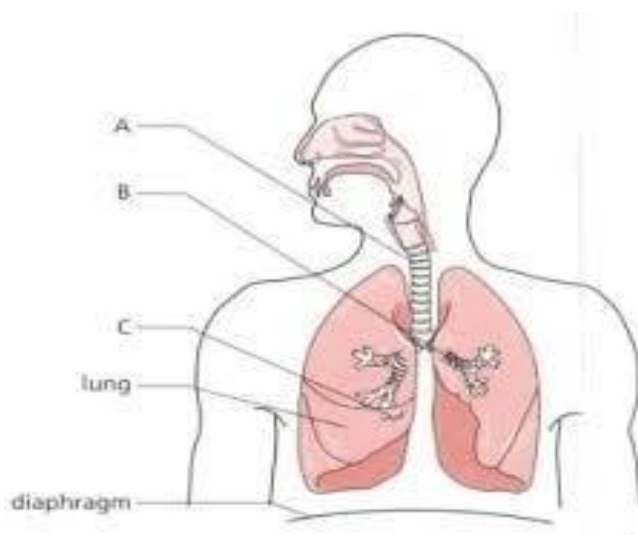
Make sure You label each parts of a seed in it.

Q2. Choose a specific migratory bird. (Any one)

- Birds
- Butterflies
- Whales

* Find and write about their routes, distances and reasons for migration on A-4 size sheet.

Q3. Label the given diagram.



Q4. Design an informative poster highlighting the differences between healthy and unhealthy habits.

- Use catchy slogans and informative points.
- Do it on A-3 size sheet.

Q5. Learn all the syllabus done in the month of April and May.

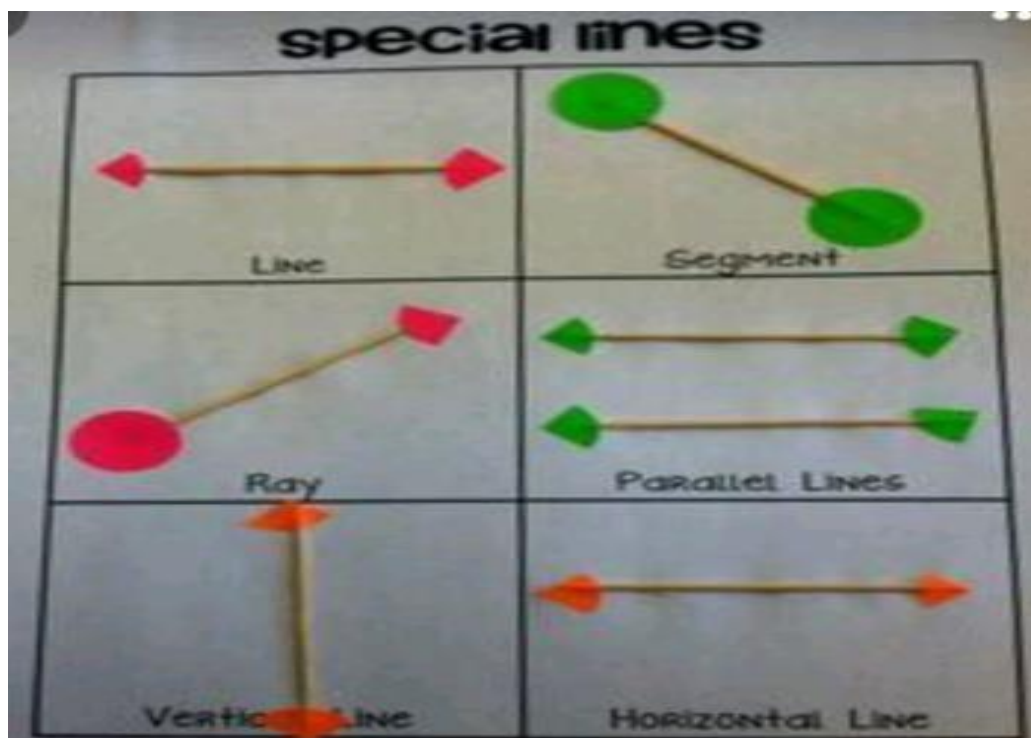
SUBJECT-MATH

*Do practice chapter 3,4 and 5

*Learn tables 2 to 20.

ACTIVITY 1:- Make the following special lines with the help of toothpick and colourful paper on A4 size sheet. You can use your own creative way to make lines. An image is given on the right side as an example for you.

*Line, Line segment, Ray, Horizontal line and Vertical line, slant line



ACTIVITY 2:- Make vegetable bill including cost per kg. Quantity purchased and final cost .
Make it for 5days on 5 separate sheet. For example.

S.NO	ITEM NAME	QUANTITY	PER KG COST	FINAL COST
1.				
2				
3				
4				
5				

PRACTICE-1

TOPIC – LARGER NUMBERS

1. Write the numbers.

a) One lakh fifteen thousand six hundred

b) Three crore fifty-two lakh forty-one thousand seventy

2. Write the numbers in words.

a) 34,50,000

b) 1,65,08,070

3. Write the place value of the digit 8 in each of the following numbers?

a) 96,48,000

b) 1,81,40,050

4. What are the missing numbers?

a) $2,25,430 = \underline{\hspace{2cm}} + 20,000 + 5000 + 400 + 30$

b) $85,32,000 = 80,00,000 + 5,00,000 + \underline{\hspace{2cm}} + 2000$

5. Which number is greater. 4,21,668 or 4,61,668?

6. Which number is smaller, 56,32,000 or 56,23,000?

7. Find the difference between the place value and face value of 7 in 371859.

8. Find the sum of two place values of 2s in the 2703268.

9. Write each of the following in expanded form.

a) 329010

b) 4278150

10. Write the successor of the following numbers.

a) 9999399

b) 83009

PRACTICE-2

TOPIC – ADDITION AND SUBTRACTION

1. Add.

a) $58,23,609 + 73,82,154$

b) $1,16,90,009 + 75,79,238$

2. Subtract.

a) $28,02,984 - 17,93,420$

b) $6,98,53,208 - 1,95,45,304$

3. Solve the word problems.

a) Company A collected 5,53,078 clothes at a charity drive. Company B collected 78,021 more clothes than company A. How many clothes did company B collect?

b) A property developer needs 3,76,39,523 bricks to build a township. It has 2,83,26,416 bricks now. How many bricks must it buy?

4. Fill in the blanks.

a) $356288 + 1 = \underline{\hspace{2cm}}$

b) $63888 + 0 = \underline{\hspace{2cm}}$

c) $4153 + 2675 = \underline{\hspace{2cm}} + 4153$

d) $2696 + \underline{\hspace{2cm}} = \underline{\hspace{2cm}} + 3901$

e) $48580 - 1 = \underline{\hspace{2cm}}$

f) $864456 - 0 = \underline{\hspace{2cm}}$

5. Find the difference between 643849 and 966058

6. What must be subtracted from 50000 to get 37261?

7. Find the number which is

a) 700 more than 28639

b) 300 less than 10387

8. Add the following .

a) 24753, 15632 and 23524

b) 156323, 24356 and 1352

9. By how much is 133671 greater than the sum of 45385 and 82355?

10. The difference between two numbers is 35708. If the greater of the numbers is 87732. Find their sum.

PRACTICE-3

TOPIC – MULTIPLICATION AND DIVISION

1. Multiply.

a) 4070×84

b) 539×512

c) 7404×852

d) 3092×89

2. Divide.

a) $94 \div 43$

b) $668 \div 72$

c) $69 \div 31$

d) $183 \div 44$

3. Words problems.

a) Mrs. Mehta divided ₹ 6048 equally into 16 envelopes. How much money did each envelope hold?

b) There are 2314 almonds in a bag. How many almonds are there in 128 such bags?

4. **Divide and find the quotient and the remainder:**

(a) 84 by 12

(b) 97 by 14

(c) 76 by 15

5. **Divide and check the result:**

(a) $95 \div 16$

(b) $53 \div 24$

6. Fill in blanks. a) $628 \times \underline{\quad} = 628$ b) $\underline{\quad} \times 1 = 930$ c) $0 \times 83 = \underline{\quad}$ d) $45 \times \underline{\quad} = 0$

7. Multiply by 10, 100 and 1000. a) 49×10 b) 678×100 c) 44×1000 d) 3957×100

8. Divide by 10, 100 and 1000. A) $670 \div 10$ b) $4500 \div 100$ c) $76000 \div 1000$ d) $4567 \div 100$

9. Multiply by lattice method . 63 x 35

10. Add. 76 to itself 10 times.

SOCIAL SCIENCE

1. Make a pen holder with broken mug/cup, plastic jar or used aluminium can.



2. Prepare a model on natural calamity.

(<https://youtu.be/ETBzC5GUo4gsi=DnIuzMt0lvkHBYWG>)

Refer the link.

3. Make a project file of approx. 6-7 pages on Democratic Republic of Congo including its location, climate, vegetation, wildlife, agriculture, industries. (Refer Ch-6)

SUBJECT- G.K.

Q-1) Make a greeting card for your favorite person using waste materials and waste paper ?

Q-2) Paste any 2 adventure sports photos on A4 size sheet and write their name and write 3 lines ?

SUBJECT- ART

* Make Trophy with paper cup for example

<https://youtu.be/xvMg0G9aFZ4?si=484l6omwKODxhmYH>

or

* Make family hand print on canvas for example

https://youtu.be/SbKHaWWQXXM?si=RH2M42Z_zSK7skia

A decorative border at the top of the page featuring teal palm fronds and several flowers in purple, yellow, and orange. The background consists of horizontal stripes in shades of yellow and cream.

ENJOY



SUMMER

holidays

